



# Classwork 4-7-2020

More subtraction and number naming plus  
some addition



**Lesson Plans:** 4/7/2020

**Where To Find Your Work:** please download this file [4-2 subt w diff](https://lynncronin.weebly.com/first-grade-math.html) from <https://lynncronin.weebly.com/first-grade-math.html> you will find a PowerPoint that will guide you through today's math lesson.

**Learning Objectives:** Today we will work on our routines and work on subtraction by counting up

**Learning Activities:** PowerPoint presentation, video and flashcards.

**How I will see/check your work:** please email me to tell me how it went!

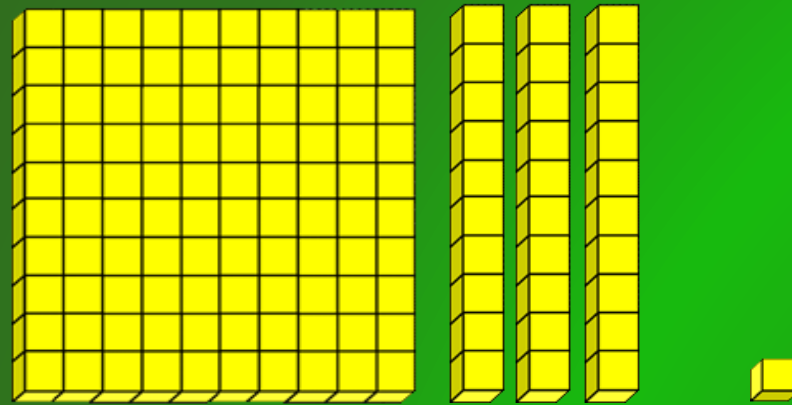
**How We Communicate:** email: [lcronin@wtps.org](mailto:lcronin@wtps.org)

Good Morning! Today is...

April 2020

Sunday	Monday	Tuesday	Wednesday	Thursday	Friday	Saturday
			1	2	3	4
5	6	7	8	9	10	11
12	13	14	15	16	17	18
19	20	21	22	23	24	25
26	27	28	29	30		

# Yesterday we were in school for 131 days



1

3

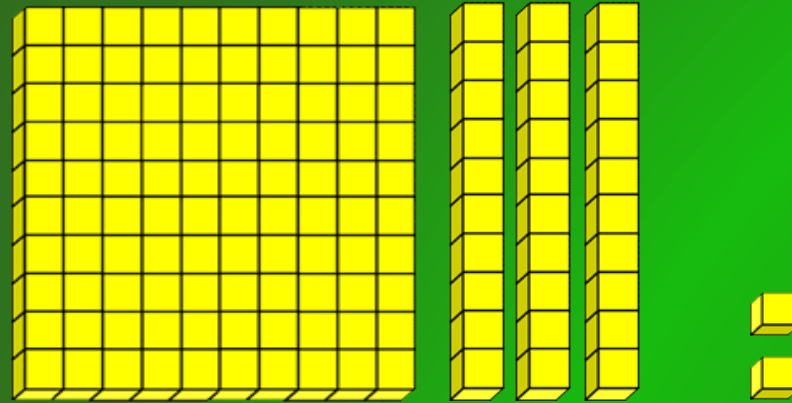
1



Ask if we have enough pennies to trade for a nickel yet.

Ask him to show you how he counted the blocks!

# Today it's 132days



1

3

2



Ask if we have enough pennies to trade for a nickel yet.

Ask him to show you how he counted the blocks!

# Fast facts!

$$3 - 2 = ?$$

Which number is the smallest?

Tap the small number into your head

Count up while putting up fingers for each count

On this one he could hold up 5 fingers and pull 2 down

# Fast facts

$$3 - 2 = 1$$

Which number  
is the  
smallest?

Tap the small  
number into  
your head

Count up  
while putting  
up fingers for  
each count

# Fast facts

$$4 + 2 = ?$$

Which number  
is the  
smallest?

Tap the small  
number into  
your head

Count up  
while putting  
up fingers for  
each count



# Fast facts

$$4 + 2 = 6$$

Which number  
is the  
smallest?

Tap the small  
number into  
your head

Count up  
while putting  
up fingers for  
each count

# Fast facts

$$5 + 5 = ?$$

Which number  
is the  
smallest?

Tap the small  
number into  
your head

Count up  
while putting  
up fingers for  
each count

# Fast facts

$$5 + 5 = 10$$

Which number  
is the  
smallest?

Tap the small  
number into  
your head

Count up  
while putting  
up fingers for  
each count

# Fast facts

$$7 - 3 = ?$$

Which number  
is the  
smallest?

Tap the small  
number into  
your head

Count up  
while putting  
up fingers for  
each count

# Fast facts

$$7 - 3 = 4$$

Which number  
is the  
smallest?

Tap the small  
number into  
your head

Count up  
while putting  
up fingers for  
each count

**Tell someone what number this is**



**Sometimes  
its hard to  
say a  
number.  
The teen  
numbers are  
especially  
hard!**

**Tell someone what number this is**



**Sometimes  
its hard to  
say a  
number.  
The teen  
numbers are  
especially  
hard!**

**Tell someone what number this is**



**Sometimes  
its hard to  
say a  
number.  
The teen  
numbers are  
especially  
hard!**

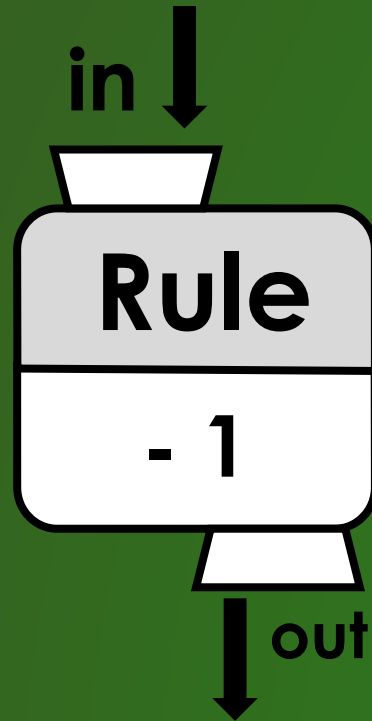


**Tell someone what number this is**



**Sometimes  
its hard to  
say a  
number.  
The teen  
numbers are  
especially  
hard!**

# Finish this What's My Rule grid!



In	Out
3	
8	
3	
5	

Subtraction is hard.  
Let me know if he is having too hard a time on this!

Hi buddy!

I miss you!





**Please complete flashcards.**

**Let me know how this is going.**

**[lcronin@wtps.org](mailto:lcronin@wtps.org)**

**or cell phone:**

**856-857-7707**