

Classwork 4-6-2020

Shapes Quiz

What do you remember?

Monday 4-6-2020

Where To Find Your Work: <https://lynnncronin.weebly.com/>

Learning Objectives: Quick Quiz – how much have you learned?

Learning Activities: PowerPoint Quiz, New Quizlet set, drills

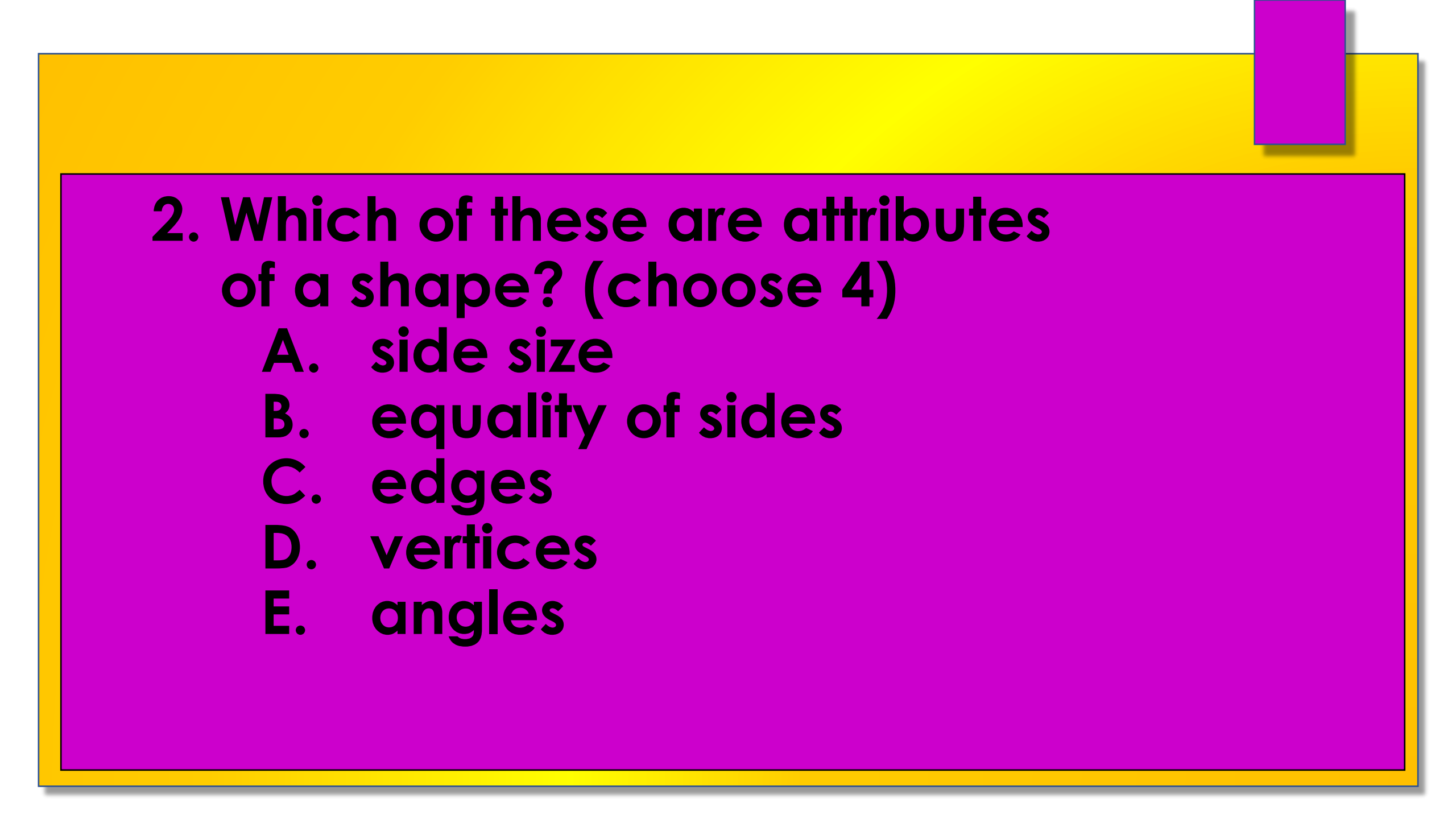
How I will see/check your work: Email me with answers to the quiz. Just a list of letters is good. Also email me your drills numbers

How We Communicate: email lcronin@wtps.org

MA.3.MD.D.8, MA.3.G.A , MA.3.G.A.1, MA.3.G.A.2, MA.3.OA.C, MA.3.OA.C.7

1. What is an attribute?

- A. the point on a shape
- B. a shape made with curving lines
- C. a description



2. Which of these are attributes of a shape? (choose 4)

- A. side size**
- B. equality of sides**
- C. edges**
- D. vertices**
- E. angles**




3. What makes a shape a polygon?

(choose 2)


- A. it is 2-D**
- B. it has four sides**
- C. it is 3-D**
- D. the edges are curved**
- E. it is closed**

4. Which polygon is this?




- A. Parallelogram**
- B. Rhombus**
- C. Trapezoid**
- D. Parallelogram**

5. Which polygon is this?



- A. Parallelogram**
- B. Rhombus**
- C. Trapezoid**
- D. Parallelogram**

6. Which polygon is this?




- A. Parallelogram**
- B. Rhombus**
- C. Trapezoid**
- D. Parallelogram**

7. Which polygon is this?



- A. Parallelogram**
- B. Rhombus**
- C. Trapezoid**
- D. Parallelogram**

Did you remember them?

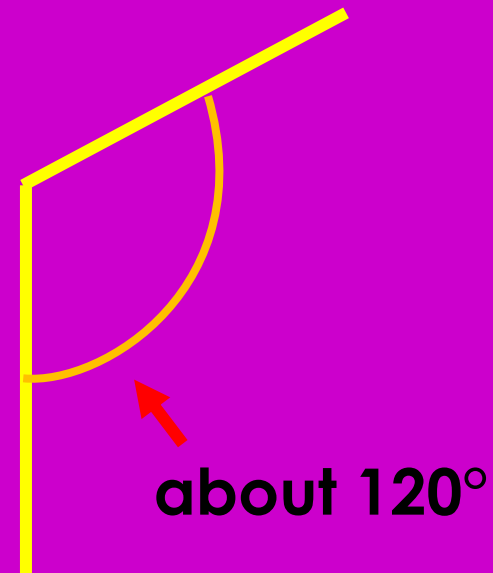


8. What is a right angle?

- A. an angle on a shape that is square like the edges of a paper.
- B. an angle that is sharp and pointy
- C. and angle that is wide


9. Which angle is this?

- A. right**
- B. acute**
- C. obtuse**



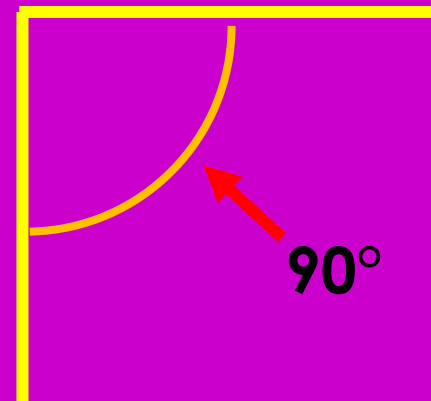
10. Which angle is this?

- A. right**
- B. acute**
- C. obtuse**

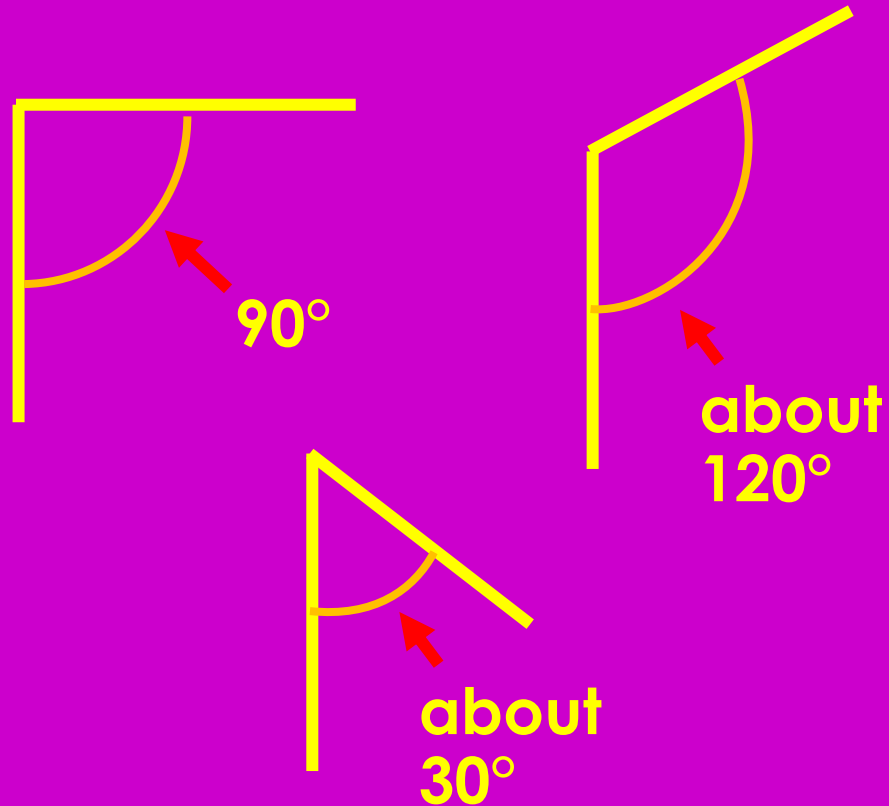


11. Which angle is this?

- A. right**
- B. acute**
- C. obtuse**



Did you remember?




Right – a square angle is 90° . It is the same as the corner of a paper or the corners on a square.

Obtuse – an obtuse angle is bigger than a square angle.

Acute – an acute angle is smaller than a square angle. (I think of it as a cute little angle!)

12. How many vertices does this shape have?

- A. 9**
- B. 6**
- C. 12**





I love that word!

13. What is a vertex?

- A. the points on the outside of a shape**
- B. all corners of a shape**
- C. only the pointing out points on a shape**

Please complete a Quizlet set and your drills

This Week's Quizlet Link:

https://quizlet.com/_8a1bqv?x=1qqt&i=2qrr7s

lcronin@wtps.org