



Classwork 4-30-2020

Today we will continue practicing adding tens and we will look at clocks.

Good Morning from Mrs. Cronin

Lesson Plans: 4/30/2020

Where To Find Your Work: <https://lynncronin.weebly.com/first-grade-math.html>

Learning Objectives: Today we will practice telling time to the hour and comparing numbers with Alli-Gator.

Learning Activities: PowerPoint presentation and flashcards.

How I will see/check your work: please email me to tell me how it went!

How We Communicate: lcronin@wtps.org or 856-857-7707

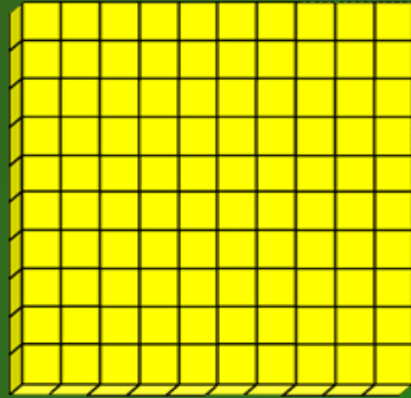
MA.1.OA.A.2, MA.1.OA.C, MA.1.OA.D.7, MA.1.NBT.B.2, MA.1.NBT.B.2b, MA.1.NBT.C -3

Good Morning! Today is...

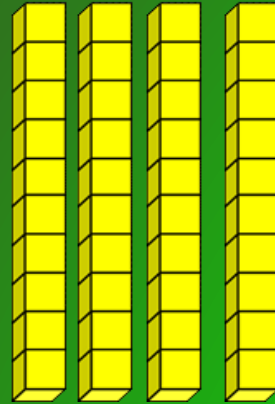
April 2020

Sunday	Monday	Tuesday	Wednesday	Thursday	Friday	Saturday
			1	2	3	4
5	6	7	8	9	10	11
12	13	14	15	16	17	18
19	20	21	22	23	24	25
26	27	28	29	30		

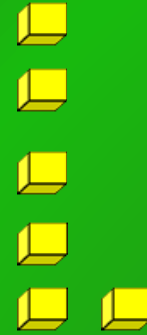
Yesterday we were in school for 146 days



1



4



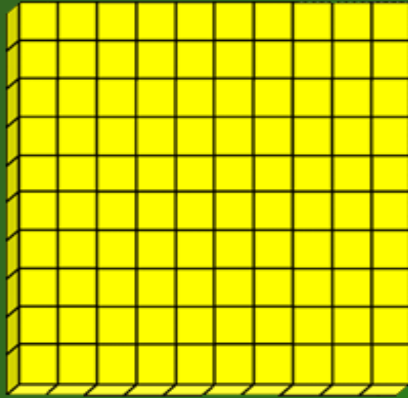
6



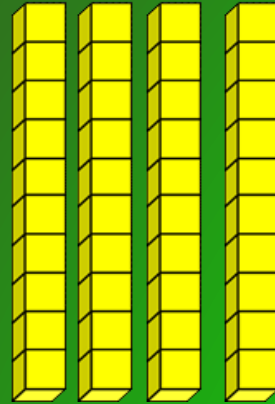
Ask if we have enough pennies to trade for a nickel yet.

Ask him to show you how he counted the blocks!

Today is 147 days!



1



4



6



Ask if we have enough pennies to trade for a nickel yet.

Ask him to show you how he counted the blocks!

Fast Facts: Subtract

$$5 - 2 = ?$$

Which number
is the
smallest?

Tap the small
number into
your head

Count up
while putting
up fingers for
each count

Fast Facts: Subtract

$$5 - 2 = 3$$

Which number
is the
smallest?

Tap the small
number into
your head

Count up
while putting
up fingers for
each count

Subtract

$$8 - 5 = ?$$

Which number
is the
smallest?

Tap the small
number into
your head

Count up
while putting
up fingers for
each count

Subtract

$$8 - 5 = 3$$

Which number
is the
smallest?

Tap the small
number into
your head

Count up
while putting
up fingers for
each count

Subtract

$$12 - 7 = ?$$

Which number
is the
smallest?

Tap the small
number into
your head

Count up
while putting
up fingers for
each count

Subtract

$$12 - 7 = 5$$

Which number
is the
smallest?

Tap the small
number into
your head

Count up
while putting
up fingers for
each count

Subtract

$$15 - 9 = ?$$

Which number
is the
smallest?

Tap the small
number into
your head

Count up
while putting
up fingers for
each count

Subtract

$$15 - 9 = 6$$

Which number
is the
smallest?

Tap the small
number into
your head

Count up
while putting
up fingers for
each count

Tell someone what number this is



**Sometimes
its hard to
say a
number.
The teen
numbers are
especially
hard!**

Tell someone what number this is



**Sometimes
its hard to
say a
number.
The teen
numbers are
especially
hard!**

Tell someone what number this is



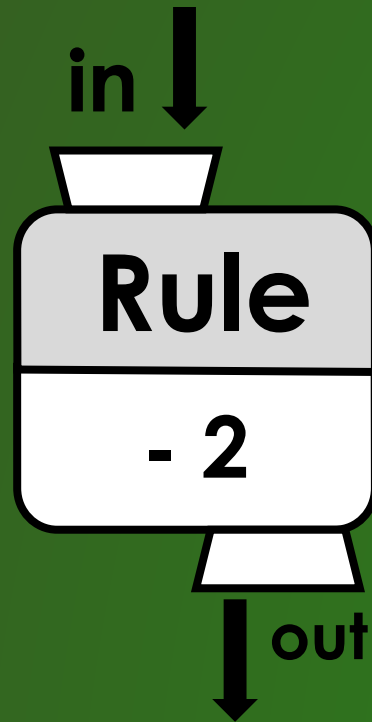
**Sometimes
its hard to
say a
number.
The teen
numbers are
especially
hard!**

Tell someone what number this is



**Sometimes
its hard to
say a
number.
The teen
numbers are
especially
hard!**

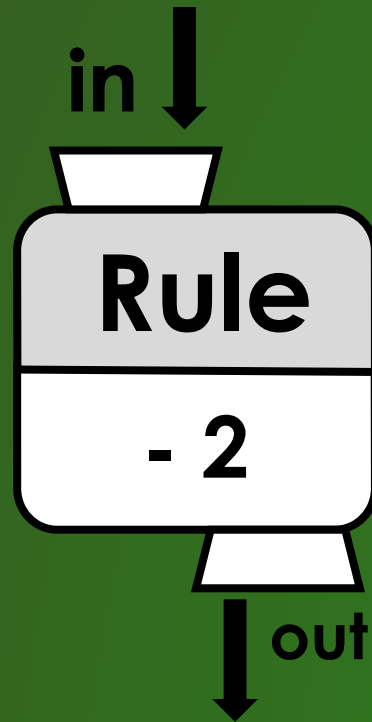
Finish this What's My Rule grid!



In	Out
3	
8	
4	
5	

Subtraction is hard.
Let me know if he is having too hard a time on this!

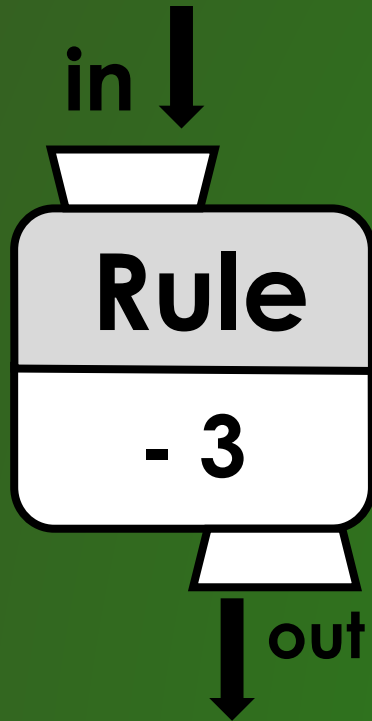
Finish this What's My Rule grid!



In	Out
3	1
8	6
4	2
5	3

Subtraction is hard.
Let me know if he is having too hard a time on this!

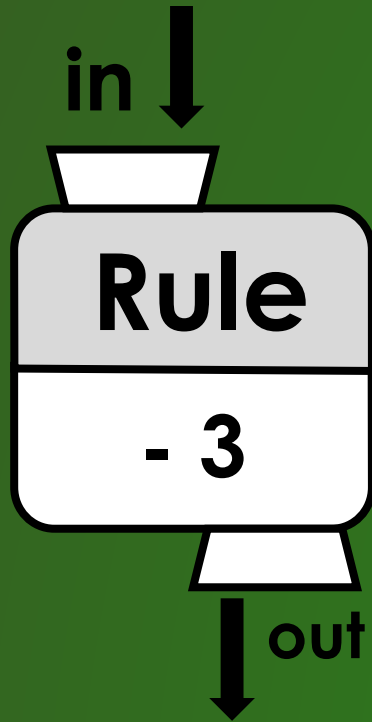
Try another one!



In	Out
3	
8	
4	
5	

Subtraction is hard.
Let me know if he is having too hard a time on this!

Try another one!



In	Out
3	0
8	5
4	1
5	2

Subtraction is hard.
Let me know if he is having too hard a time on this!

Hi buddy!

I miss you!





Please complete flashcards.

Let me know how this is going.

lcronin@wtps.org

or cell phone:

856-857-7707