



Classwork 4-8-2020

Today we will review place value and naming large numbers. There are 5 practice questions at the end for you to send me the answers for.

(NO! Spelling does not count – as long as I can figure out what you mean!)



Lesson Plans: 4/20/2020

Where To Find Your Work: <https://lynncronin.weebly.com>

Learning Objectives: Today we will review place value and number naming.

Learning Activities: PowerPoint, Quizlet, Drills

How I will see/check your work: please email or text me your answers and tell me how you are doing

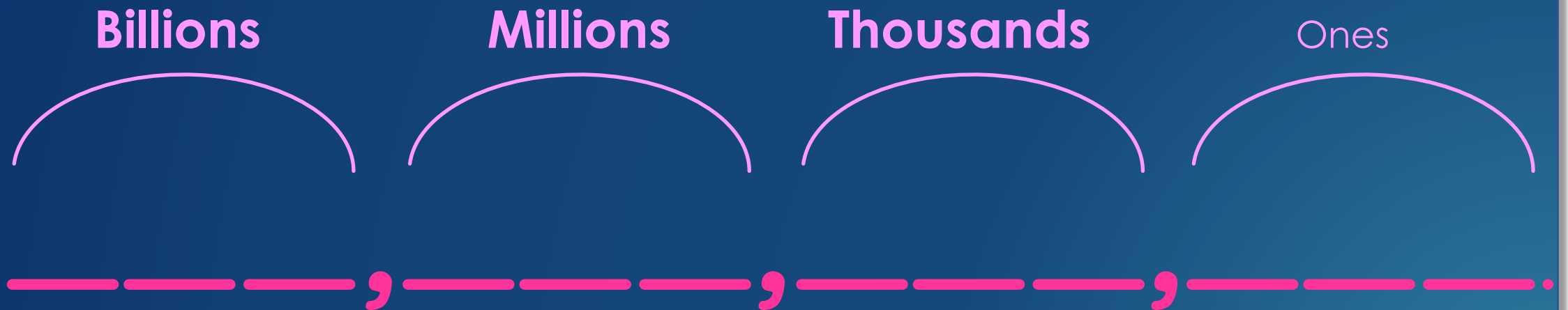
How We Communicate: lcronin@wtps.org / 856-857-7707


Grade 3 - MA.3.NBT.A, MA.3.NBT.A.1, MA.3.NBT.A.2, MA.3.NBT.A.3, MA.3.NF.A

When we last saw each other...

I mean communicated with each other...

We learned how to name numbers.





Let's review:


Each group of three has a name that we use when we are reading the number out-loud.

Billions

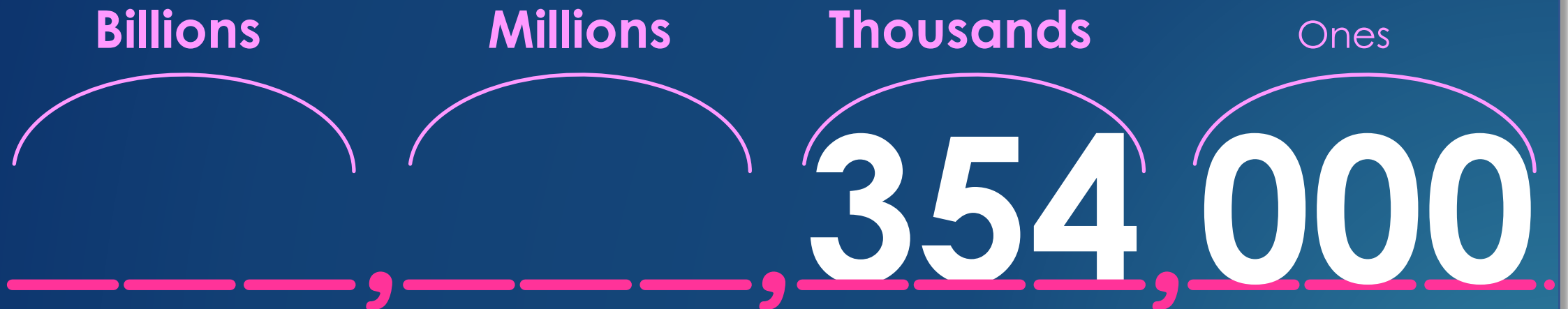
Millions

Thousands

Ones



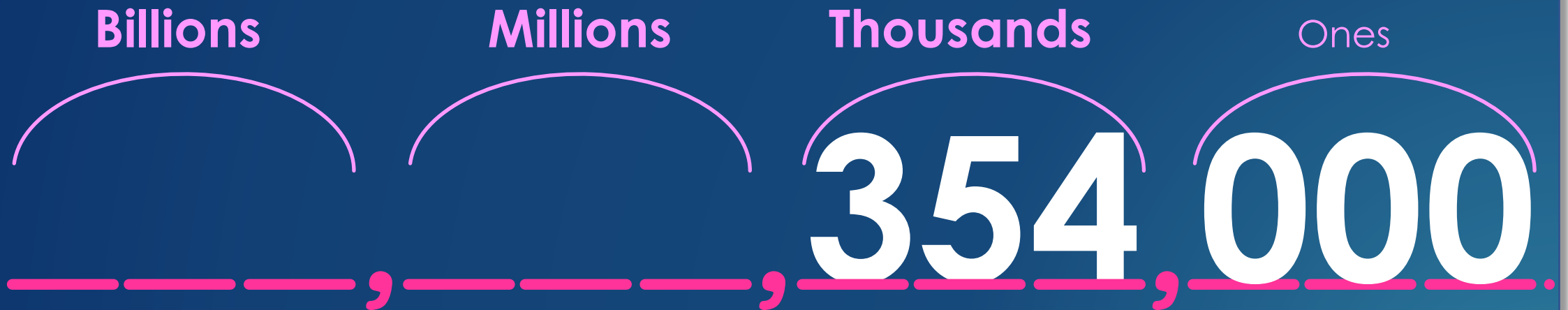
We find the largest group and name it
as if it is in the ones group
– then we say the group name.



Try this then check it on the next page

This number is...

Three hundred fifty-four thousand



This number is...

Three hundred fifty-four thousand

In the ones place
this would be
three hundred fifty-four

Billions

Millions

Thousands

Ones



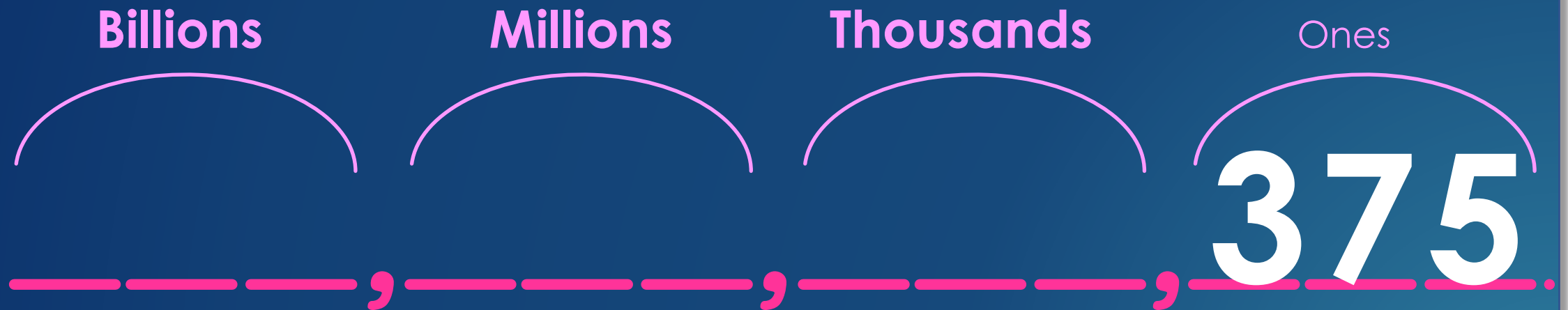


**Do you remember this?
We will try several!**

But if you don't get it – please tell me!!

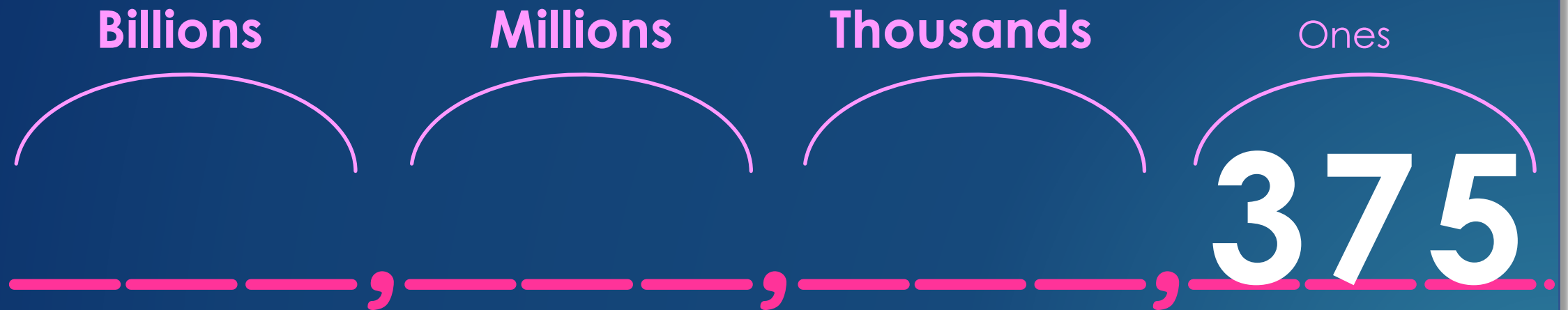
What is this number?

(remember – find the largest group then name its group name)



Try this then check it on the next page

Don't forget - we don't say the ones group name



Three hundred seventy-five

Billions

Millions

Thousands

Ones



What is this number?

Billions

Millions

Thousands

Ones

294,000,000

Two hundred ninety-four million

Billions

Millions

Thousands

Ones

294,000,000



What number is this?

Billions

Millions

Thousands

Ones

984,000,000,000

Nine hundred eighty-four billion

Billions

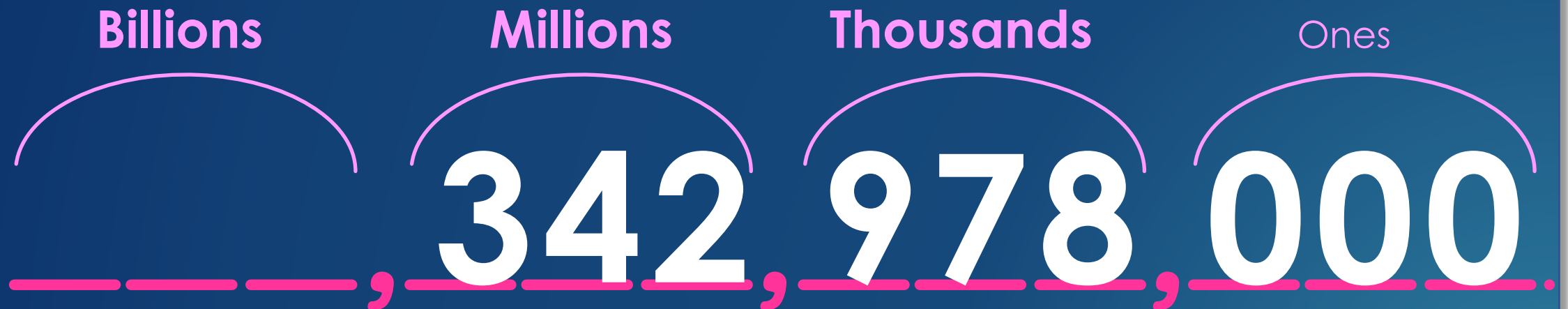
Millions

Thousands

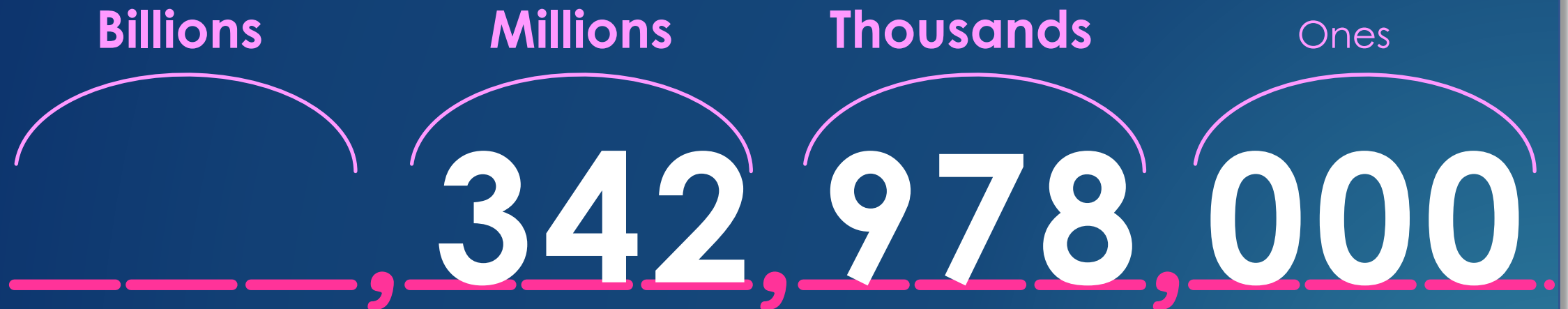
Ones

984,000,000,000


The next thing we learned was that you name the number in each group that has numbers other than zero.



Name the first group – then add the group name
then add the second group – and its group name
until you get to zeros.



What is this number?



Billions

Millions

Thousands

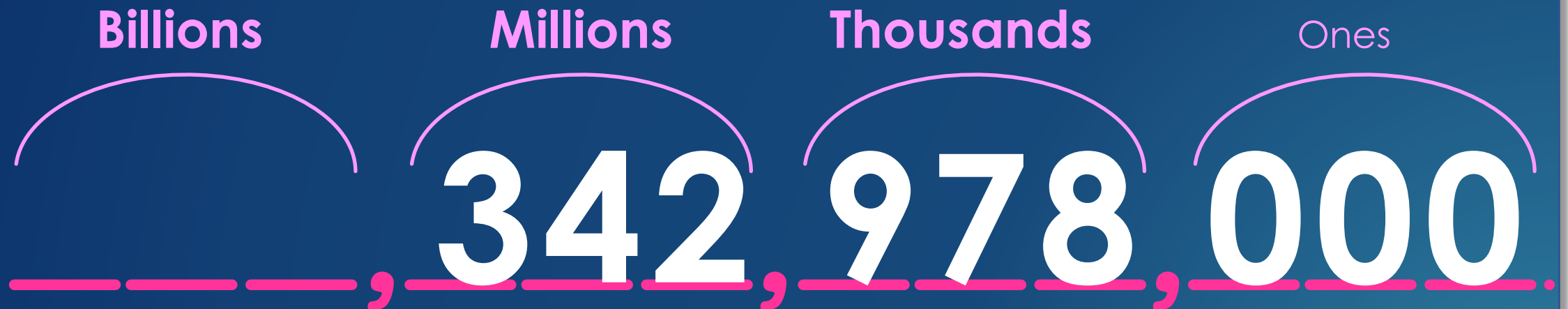
Ones

342,978,000

First group: three hundred forty-two million
Second group: nine hundred seventy-eight thousand.

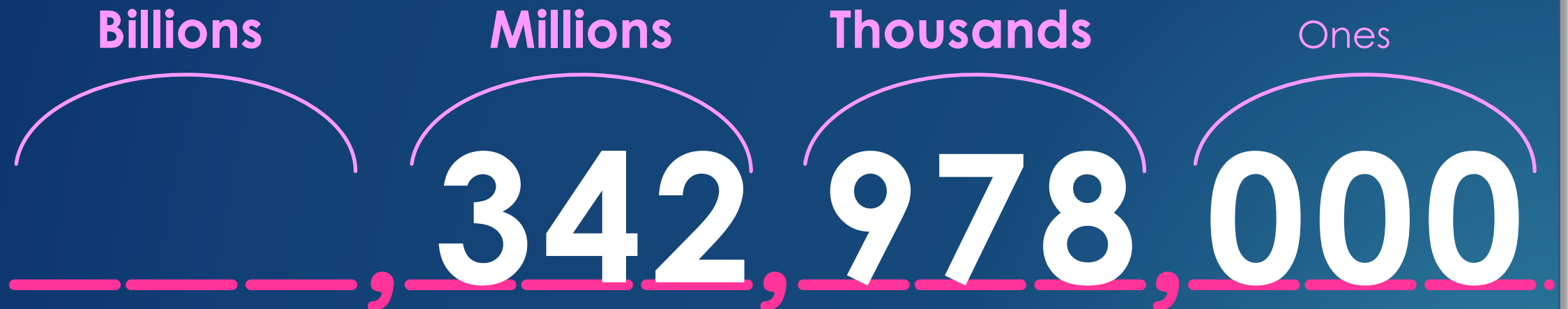
Then put them together:

three hundred forty-two million nine hundred seventy-eight thousand



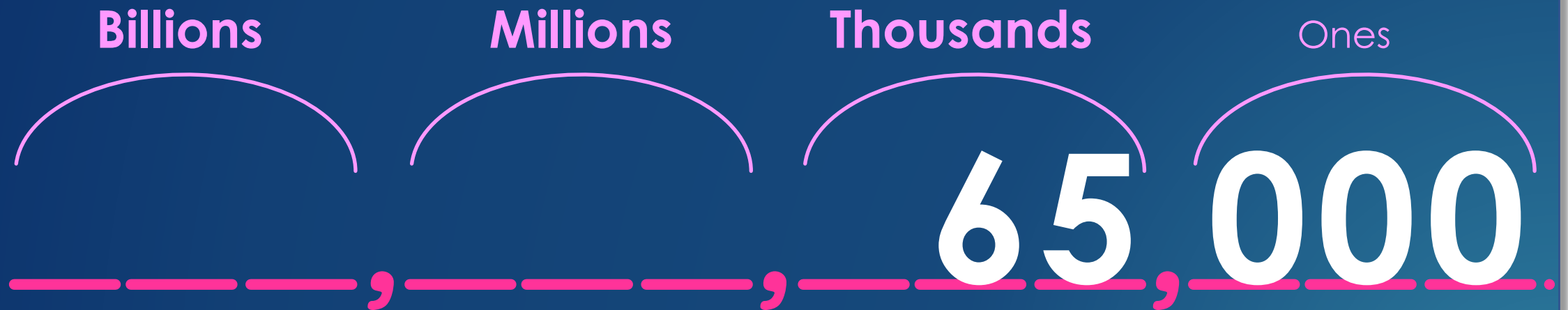
Try some and send me the answers!

1. What is this number?



Try this and send me the answers!

2. What is this number?



Try this and send me the answers!

3. What is this number?



Try this and send me the answers!

3. What is this number?





Practice your multiplication on Quizlet at:

https://quizlet.com/_8bkq74?x=1qqt&i=2qrr7s

Next complete your drills and send me your results.

lcronin@wtps.org 856-857-7707